

## Assegno per la classe 5 sez. A



### MATEMATICA :

#### OPERAZIONI CON I NUMERI DECIMALI

$156,34 + 981 + 3,7 =$

$19,74 + 7 + 632,19 =$

$8436,01 + 9683 + 1366,411 =$

$9366,4 + 12633,88 + 4566,951 =$

$96000 - 54811,315 =$

$8400,3 - 3511,166 =$

$7433,21 - 5748,165 =$

$42300 - 11683,24 =$

$900 - 122,648 =$

$18,5 \times 3,26 =$

$84,3 \times 29,8 =$

$73,5 \times 84,9 =$

$28,5 \times 1,66 =$

$54,3 \times 2,88 =$

$124,12 : 0,25 =$

$765,48 : 32 =$

$7,6 : 22 =$

$17 : 34 =$

$16,48 : 32 =$

#### EQUIVALENZE

$\text{cm } 179 = \text{dam}$

$\text{m } 50 = \text{dam}$

$\text{km } 3,007 = \text{m}$

$\text{cm } 1200 = \text{km}$

$\text{dam } 82,14 = \text{m}$

$\text{dm } 1,99 = \text{m}$

$\text{cm } 600 = \text{dam}$

$\text{hm } 28,009 = \text{dm}$

$\text{m } 75 = \text{cm}$

$\text{mm } 440 = \text{dam}$

$\text{l } 60 = \text{ml}$

$\text{dl } 13,14 = \text{l}$

$\text{l } 500 = \text{hl}$

$\text{l } 45 = \text{dal}$

$\text{dal } 0,0072 = \text{cl}$

$\text{ml } 1260 = \text{l}$


$\text{dal } 1,34 = \text{ml}$

$\text{dl } 497 = \text{hl}$


$\text{l } 0,45 = \text{dl}$

$\text{dl } 88,11 = \text{dal}$

**CALCOLA IL PERIMETRO E L'AREA DELLE SEGUENTI FIGURE**

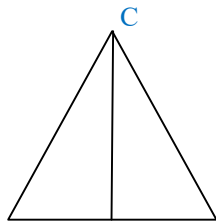


$AB = \text{CM } 21$



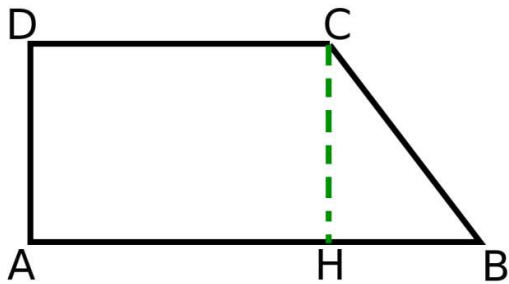
$AB = \text{cm } 48$

$BC = \text{cm } 23$



$AB = \text{dm } 31$

$CH = 26$

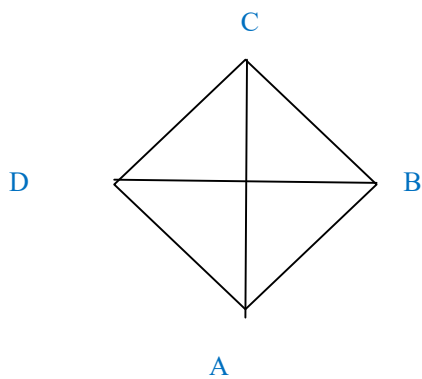


$AB = \text{m } 41$

$BC = \text{m } 23$

$CD = \text{m } 35$

$DA = \text{m } 32$



$AB = \text{cm } 22$

$AC = \text{cm } 64$

$BD = \text{cm } 40$

**ESPRESSIONI**

$51 : \{ 12 + 3 \times [ 2 \times 18 - 9 \times ( 24 : 6 - 2 ) : 6 ] - 60 \} + 7$

**8**

$( 25 \times 2 : 10 \times 5 ) + 9 \times 8 : \{ 56 + 3 \times [ 5 + 6 \times ( 3 \times 4 - 10 ) - 17 ] - 5 \times 4 \}$

**102**

$\{ 4 \times 25 + 2 \times 25 + ( 3 \times 5 ) \times [ 2 \times 25 - 5 \times ( 36 : 6 - 2 \times 2 ) ] - 24 \times 25 \} : ( 27 : 3 + 1 )$

**15**